

Name:
Date:
Class:
Period:

Dichotomous Key Activity

Directions: Name the creatures on the sheet with their pictures. Use this key to identify the creatures by both number and name.

1. Does your creature have feet?
 - 1a. If NO, go to 2
 - 1b. If YES, go to 7

2. Does your creature have wheels?
 - 2a. If NO, go to 4
 - 2b. If YES, go to 3

3. Does your creature have only one wheel?
 - 3a. If NO, your creature is # _____ Name: _____
 - 3b. If YES, go to 6

4. Does your creature have teeth?
 - 4a. If NO, go to 5
 - 4b. If YES, your creature is # _____ Name: _____

5. Does your creature have wings?
 - 5a. If YES, your creature is # _____ Name: _____
 - 5b. If NO, your creature is # _____ Name: _____

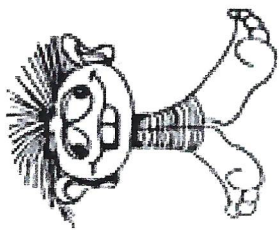
6. Does your creature have only one eye?
 - 6a. If NO, your creature is # _____ Name: _____
 - 6b. If YES, your creature is # _____ Name: _____

7. Does your creature have two feet?
 - 7a. If NO, your creature is # _____ Name: _____
 - 7b. If YES, go to 8


8. Does your creature have two eyes?
 - 8a. If NO, go to 9
 - 8b. If YES, your creature is # _____ Name: _____

9. Does your creature have two arms?
 - 9a. If NO, your creature is # _____ Name: _____
 - 9b. If YES, your creature is # _____ Name: _____


Name these creatures:




1. _____




2. _____



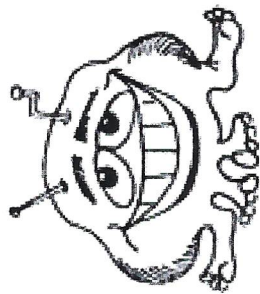
3. _____



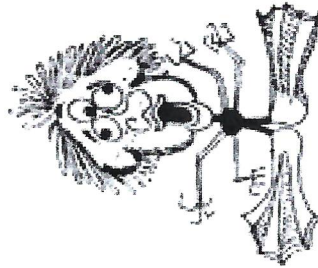
4. _____




5. _____



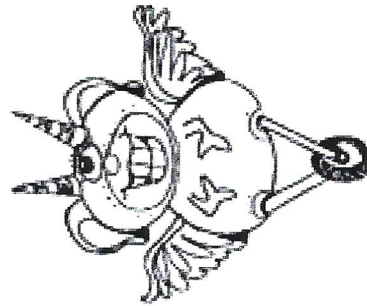
6. _____



7. _____



8. _____



9. _____



10. _____